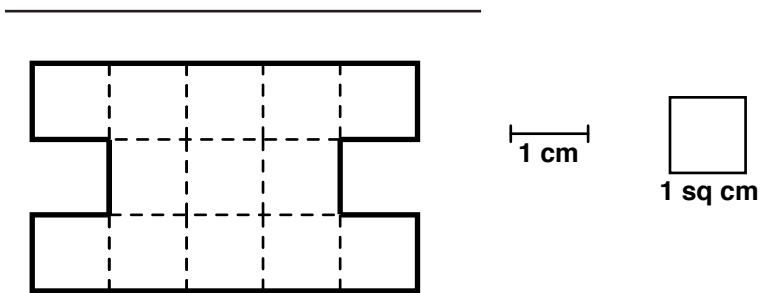
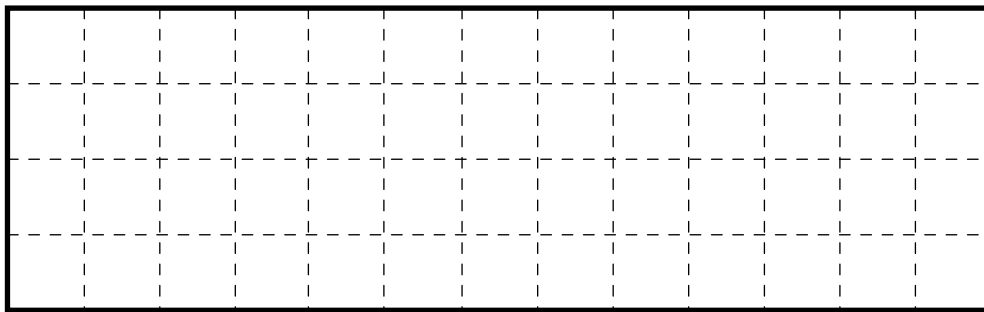


**Part 5** Area and Perimeter

1. **A.** Find the area of the shape below in square centimeters.

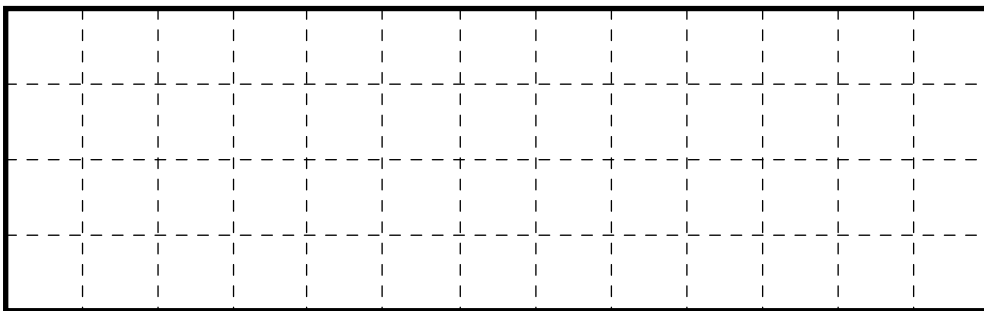


**B.** Find the perimeter of the shape. \_\_\_\_\_



2. **A.** Draw a shape that has the same area but a smaller perimeter.

**B.** Write the perimeter of your shape in Question 2A. \_\_\_\_\_



**D.** Write the perimeter of your shape in Question 2C. \_\_\_\_\_